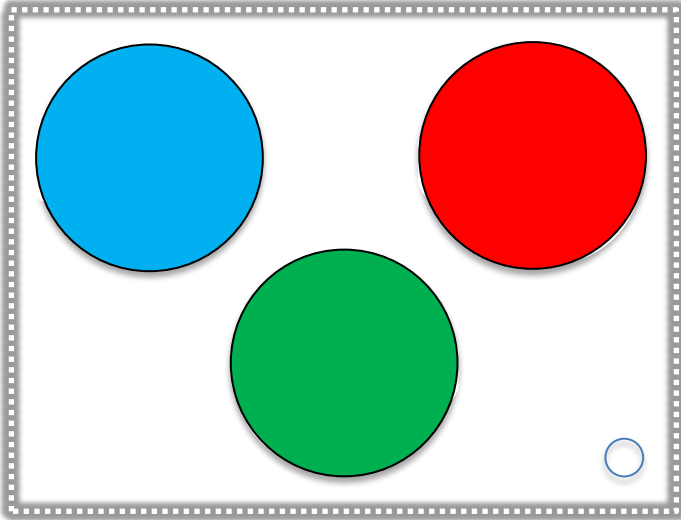
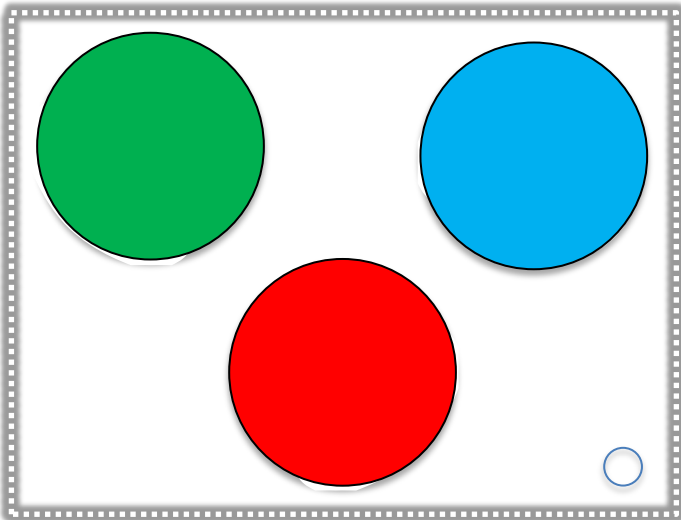


Read the clues to solve the puzzles and
write the numbers in each circle.



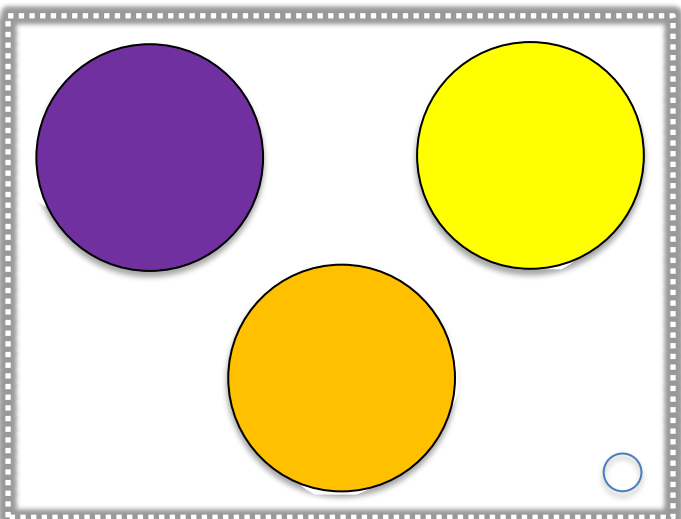
- There are 3 numbers under the coloured spots.
- All three numbers are even.
- Red is the largest number.
- The three numbers add together to make 10.

Q: Do you know what number is under each colour?



- There are 3 numbers under the coloured spots.
- Two numbers are odd.
- Blue and red make 7.
- The three numbers add to make 10.
- Blue is the smallest number.

Q: Do you know what number is under each colour?



- There are 3 numbers under the coloured spots.
- Two numbers are less than 5 and are even.
- The three numbers add to make 10.
- Yellow is 2 more than purple.

Q: Do you know what number is under each colour?